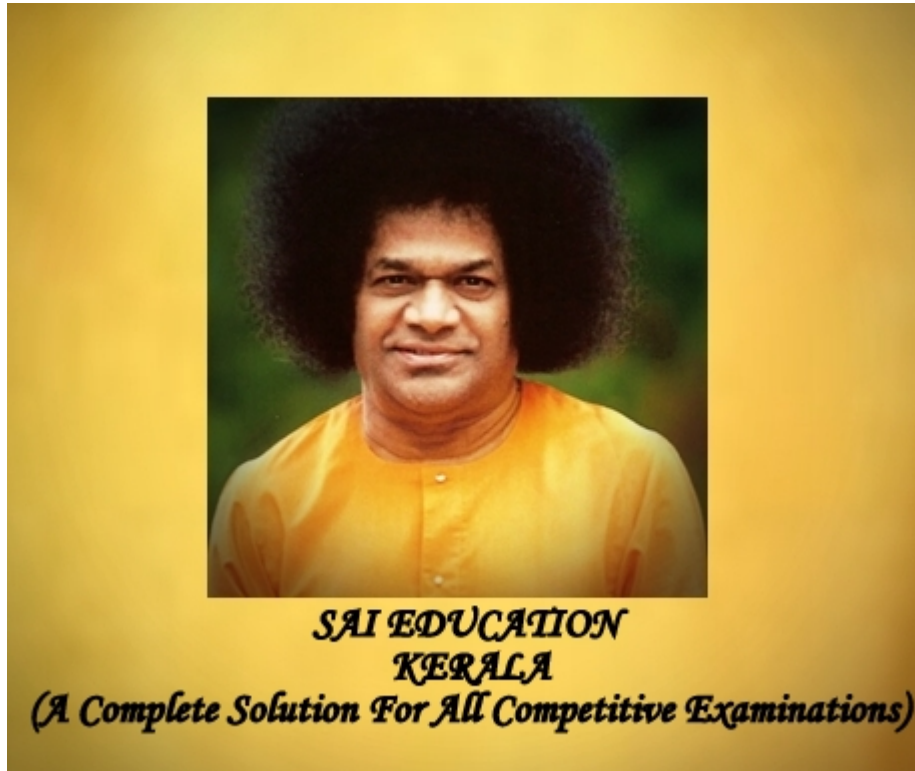


# 100 DAYS ONLINE COACHING FOR MISSION 2019( 09-04-19 )-DAY 26

MIRROR IMAGES AND WATER IMAGES



NAME OF THE CANDIDATE \*

M1

---

WATCH THE ONLINE CLASSES CAREFULLY AND NOTE DOWN IT IN YOUR  
DIARY BEFORE SENDING THE ANSWERS

<https://www.youtube.com/watch?v=-W7aVv8uC2c>  
<https://www.youtube.com/watch?v=m9jFsodtVOK>  
<https://www.youtube.com/watch?v=v4oHHN0lmy0>

1. Choose the alternative which closely resembles the mirror image of the given combination.

1 point

DL9CG4728

(1) DJ8CG4728

(2) 8274CG47D

(3) 8274CG47D

(4) DL8CG4728

1

2

3

4

2. Choose the alternative which closely resembles the mirror image of the given combination.

1 point

BR4AQ16HI

(1) IH61QA4RB

(2) IH61QA4RB

(3) IH61QA4RB

(4) BR4AQ16HI

1

2

3

4

3. Choose the alternative which closely resembles the mirror image of the given combination.

1 point

ANS43Q12

- (1) AN24E01 S      (2) S 10E42NA  
(3) 2NAE40S1      (4) 1S04EANS

4

1

3

2

4. Choose the alternative which closely resembles the mirror image of the given combination.

1 point

TARA IN1014A

- (1) A4101NIARAL      (2) A1014NIARAT  
(3) A1014TARA IN      (4) A4101NIARAT

4

2

1

3

5. Choose the alternative which closely resembles the mirror image of the given combination.

1 point

Nu56p7uR

- (1) Nu56p7uR      (2) Rn7q82nN  
(3) Ru7q82uN      (4) Ru7p92uN

2

3

4

1

6. Choose the alternative which closely resembles the mirror image of the given combination.

1 point

qutubgarh

(1) putudgsrd

(2) dnunpdsrμ

(3) hragbutuq

(4) riasgdutp

3

1

4

2

7. Choose the alternative which closely resembles the water-image of the given combination.

1 point

wrote

(1) w10fē

(2) M10fē

(3) MLofē

(4) MLofē

4

1

2

3

8. Choose the alternative which closely resembles the water-image of the given combination.

1 point

D6Z7F4

(1) DēZ1Lē†

(2) DēZ1Lē†

(3) DēZ1Lē†

(4) DēZ1Lē†

3

2

1

4

9. Choose the alternative which closely resembles the water-image of the given combination.

1 point

E8t4e9C

- (1) 38t4e9C (2) E8t4e9C  
 (3) 38t4e9C (4) E8t4e9C

3

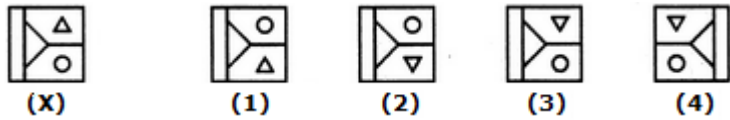
2

1

4

10. Choose the correct water image of the given figure (X) from amongst the four alternatives.

1 point



2

3

4

1

11. Choose the correct water image of the given figure (X) from amongst the four alternatives.

1 point



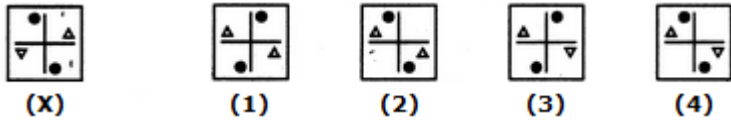
4

3

2

1

12. Choose the correct water image of the given figure (X) from amongst the four alternatives. 1 point



4

1

2

3

13. Choose the correct water image of the given figure (X) from amongst the four alternatives. 1 point



4

1

2

3

14. Choose the correct water image of the given figure (X) from amongst the four alternatives. 1 point



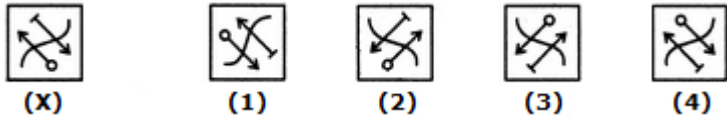
1

3

4

2

15. Choose the correct water image of the given figure (X) from amongst the four alternatives. 1 point



- 4
- 1
- 2
- 3

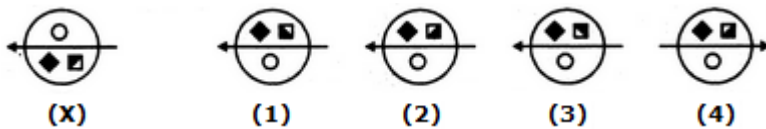
16. Choose the alternative which closely resembles the mirror image of the given combination. 1 point

**MALAYALAM**

- (1) MALAYALAM      (2) MAJAYAJAM
- (3) MALAYALAM      (4) MAGAYAGAM

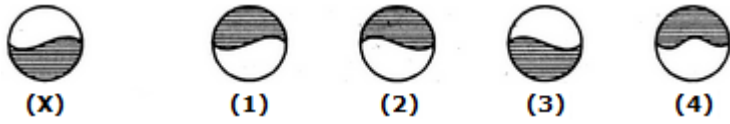
- 4
- 1
- 3
- 2

17. Choose the correct water image of the given figure (X) from amongst the four alternatives. 1 point



- 1
- 2
- 3
- 4

18. Choose the correct water image of the given figure (X) from amongst the four alternatives. 1 point



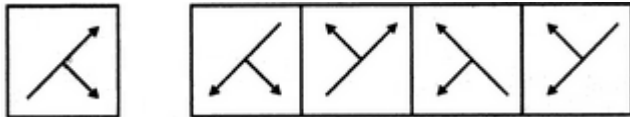
4

3

2

1

19. Choose the correct mirror image of the given figure (X) from amongst the four alternatives. (first image is x and other 4 are options namely 1,2,3,4) 1 point



3

4

2

1

20. Choose the correct mirror image of the given figure (X) from amongst the four alternatives (first image is x and other 4 are options namely 1,2,3,4) 1 point



3

2

1

4

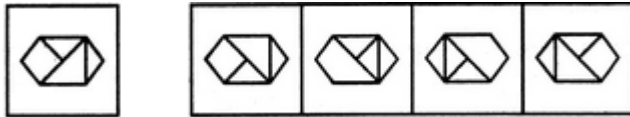


21. Choose the correct mirror image of the given figure (X) from amongst the four alternatives. (first image is x and other 4 are options namely 1,2,3,4) 1 point



- 2
- 4
- 3
- 1

22. Choose the correct mirror image of the given figure (X) from amongst the four alternatives (first image is x and other 4 are options namely 1,2,3,4) 1 point



- 1
- 4
- 3
- 2

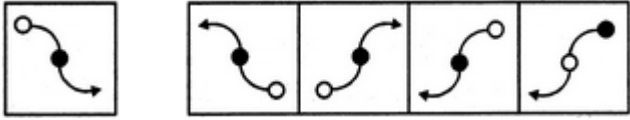
23. Choose the alternative which closely resembles the mirror image of the given combination. 1 point

UTZFY6KH

- (1) HK9YJΣΣΠ
- (2) ΠΛΣϜΛ9KH
- (3) HKθλϜΣΠ
- (4) HKθYϜΣTU

- 4
- 1
- 2
- 3

24. Choose the correct mirror image of the given figure (X) from amongst the four alternatives (first image is X and other 4 are options namely 1,2,3,4) 1 point



3

2

1

4

25. Choose the alternative which closely resembles the mirror image of the given combination. 1 point

**SUPERVISOR**

(1) **ROZIVREYUS**      (2) **SUPERVISOR**

(3) **RSOUPSEPIA**      (4) **SUPERVISOR**

3

1

2

4

Thank You 

This content is neither created nor endorsed by Google.

Google Forms