
108 DAYS ONLINE COACHING -DAY 29-(03-10-2019)

MIRROR AND WATER IMAGES



NAME OF THE CANDIDATE *

M4

PLACE OF THE CANDIDATE *

PATHANAMTHITTA

WHAT'S APP NO (JOINED IN THE SAI EDUCATION COACHING PLATFORM) *

0000000000

PLEASE WATCH THE ONLINE CLASSES CAREFULLY AND NOTE DOWN IT IN YOUR DIARY BEFORE SENDING THE ANSWERS.

<https://youtu.be/-W7aVv8uC2c>
<https://youtu.be/m9jFsodtVOk>

<https://youtu.be/v4oHHN0lmy0>

1. Which is the correct water image from the given four images? *

1 point

U4P15B7

(1) 7B1P4U

(2) 7B1P4U

(3) 7B1P4U

(4) 7B1P4U

1

2

3

4

2. Which is the correct water image from the given four images? *

1 point

NhRqSy

(1) YspRH

(2) YspRH

(3) YspRH

(4) YspRH

1

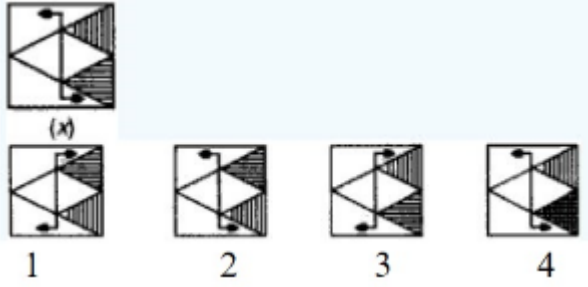
2

3

4

3. Which is the correct water image from the given four images? *

1 point



1

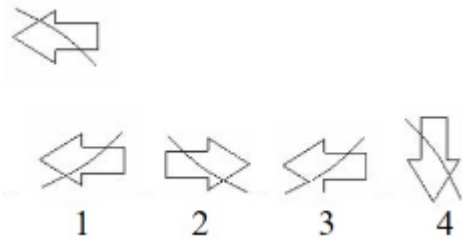
2

3

4

4. Which is the correct water image from the given four images? *

1 point



1

2

3

4

5. Which is the correct water image from the given four images? *

1 point

rise

(1) L!zE

(2) esir

(3) ɹiʒə

(4) əziɹ

1

2

3

4

6. Which is the correct water image from the given four images? *

1 point

N4tQj3

(1) 3!Q!tN4

(2) 3!Q!tN4

(3) 3!Q!tN4

(4) 3!Q!tN4

1

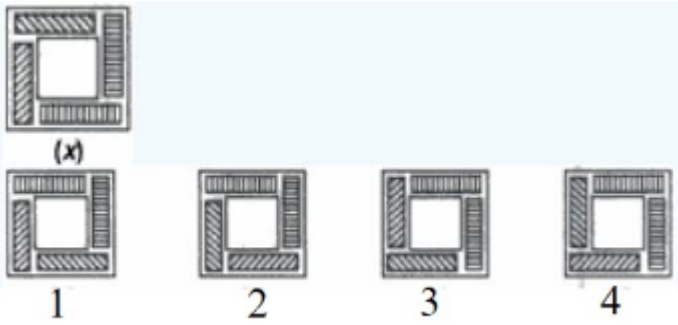
2

3

4

7. Which is the correct water image from the given four images? *

1 point



- 1
- 2
- 3
- 4

8. Which is the correct water image from the given four images? *

1 point

96FSH52

(1) 2SH2H25

(2) 2H9E96

(3) 252H2E2

(4) 252H2E96

- 1
- 2
- 3
- 4

9. Which is the correct water image from the given four images. *

1 point

BK50RP62

(1) BK20P62

(2) BK20P62

(3) BK20P62

(4) BK50P62

1

2

3

4

10. Choose the alternative which is closely resembles the mirror image of the given combination. *

1 point

ANS43Q12

(1) AN243Q12

(2) 21Q342NA

(3) 2NA34Q21

(4) 12Q43AN2

1

2

3

4

11. Choose the alternative which is closely resembles the mirror image of the given combination. * 1 point

TARAIN1014A

(1) A1101NIARAL

(3) A1014TARAIN

(2) A1014NIARAT

(4) A1101NIARAT

1

2

3

4

12. Choose the alternative which is closely resembles the mirror image of the given combination. * 1 point

1965INDOPAK

(1) KAPODI12961

(3) KAPODI12961

(2) 591ODNIKAP

(4) KAPODI12961

1

2

3

4

13. Choose the alternative which is closely resembles the mirror image of the given combination. * 1 point

MALAYALAM

(1) MALAYALAM

(2) MAJAYAJAM

(3) MALAYALAM

(4) MAGAYAGAM

1

2

3

4

14. Choose the alternative which is closely resembles the mirror image of the given combination. * 1 point

EFFECTIVE

(1) EVITCEFFE

(2) EVITCEFFE

(3) EVITCEFFE

(4) EVITCEFFE

1

2

3

4

15. Choose the alternative which is closely resembles the mirror image of the given combination. * 1 point

UTZFY6KH

(1) HK9YJΣΣ10

(2) 01ΣFΛ9KH

(3) HKθYεΣ10

(4) HKθYεΣTU

1

2

3

4

16. Choose the alternative which is closely resembles the mirror image of the given combination. * 1 point

AN54WMG3

(1) εεMΛ42NA

(2) εεMΛ42NA

(3) 3εMΛ42NA

(4) εεMΛ42NA

1

2

3

4

17. Choose the alternative which is closely resembles the mirror image of the given combination. * 1 point

SUPERVISOR

(1) Я02IVЯЭ9U2

(2) 2ПБЕЯВИ20Б

(3) Я20ПБ2ЕЯИΛ

(4) 2ПБЕЯВИ02Б

1

2

3

4

18. Choose the alternative which is closely resembles the mirror image of the given combination. * 1 point

MAGAZINE

(1) MΛGΛZINE

(2) ENIZΛGAM

(3) MΛGΛZINE

(4) ENIZΛGAM

1

2

3

4

19. Choose the alternative which is closely resembles the mirror image of the given combination *

DL9CG4728

(1) DJ8CG4728

(2) 8274G08FD

(3) 8274G08FD

(4) 8274G08FD

1

2

3

4

20. Choose the alternative which is closely resembles the mirror image of the given combination *

247596

(1) 695742

(2) 695742

(3) 247596

(4) 695742

1

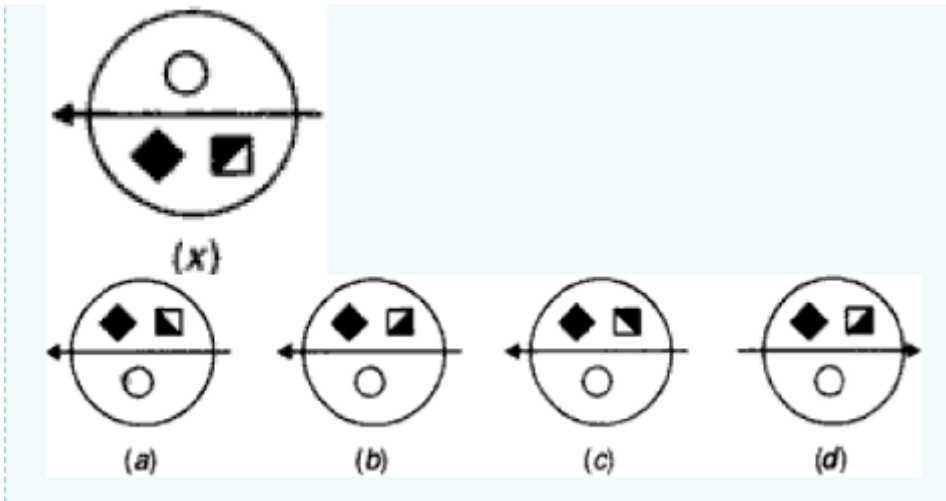
2

3

4

21. Choose the correct water - image of the fig. (x) from the given four figures. *

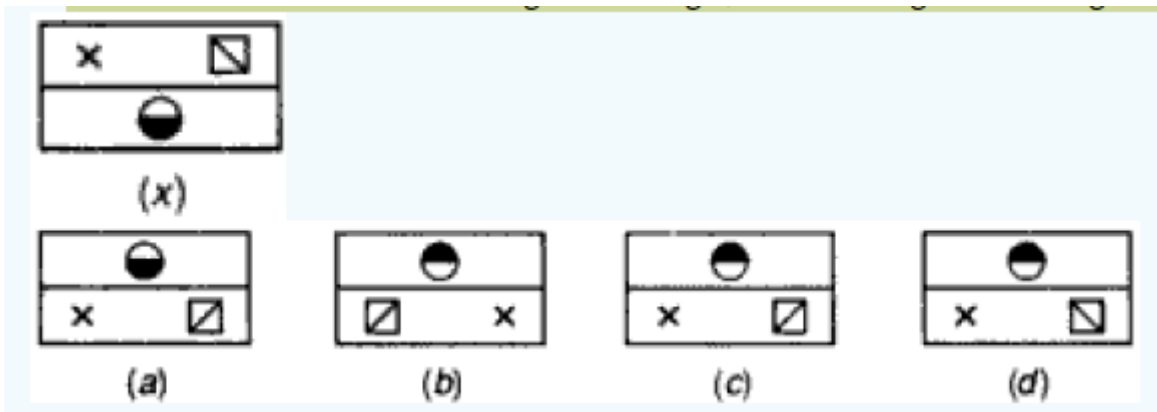
1 point



- a
- b
- c
- d

22. Choose the correct water - image of the fig. (x) from the given four figures. *

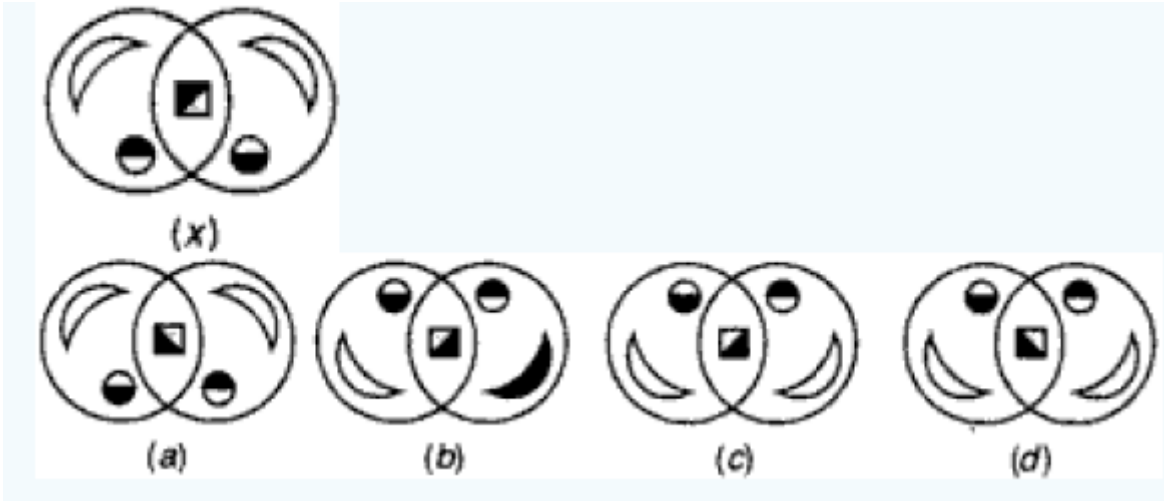
1 point



- a
- b
- c
- d

23. Choose the correct water - image of the fig. (x) from the given four figures. *

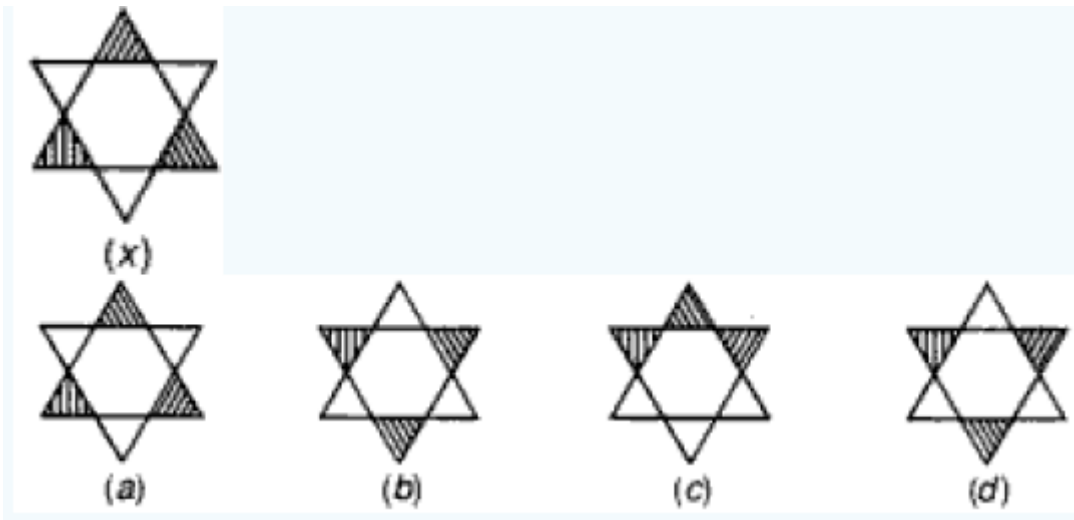
1 point



- a
- b
- c
- d

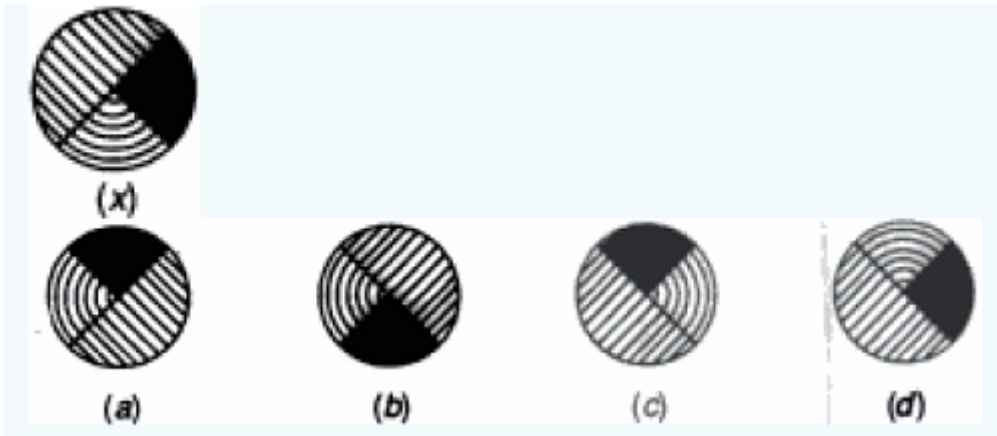
24. Choose the correct water - image of the fig. (x) from the given four figures. *

1 point



- a
- b
- c
- d

25. Choose the correct water - image of the fig. (x) from the given four figures. * 1 point



- a
- b
- c
- d

THANK YOU!!!

This content is neither created nor endorsed by Google.

Google Forms