

108 DAYS ONLINE COACHING DAY(28) - 12/03/2020 THURSDAY

Mirror and Water image



Name of the candidate *

M3

Place of the candidate *

Thiruvananthapuram

WHATS APP NUMBER (JOINED IN SAI EDUCATION ONLINE) *

0000

Please watch the following videos and answer the following questions

<https://youtu.be/-W7aVv8uC2c>
<https://youtu.be/m9jFsodtVOK>
<https://youtu.be/v4oHHN0lmy0>

1. Choose the alternative which is closely resembles the water-image of the given combination. * 1 point

NUCLEAR

(1) **ƆAƎƆSUI**

(2) **ИПСТЕАВ**

(3) **ИПСТЕАВ**

(4) **ИПСТЕАВ**

- A. 1
- B. 2
- C. 3
- D. 4

2. Choose the alternative which is closely resembles the water-image of the given combination. * 1 point

bridge

(1) **᠑᠒᠑᠒᠑**

(2) **᠑᠒᠑᠒᠑**

(3) **᠑᠒᠑᠒᠑**

(4) **᠑᠒᠑᠒᠑**

- A. 1
- B. 2
- C. 3
- D. 4

3. Choose the alternative which is closely resembles the water-image of the given combination. *

1 point

bridge

(1) r1!qde

(2) rliqde

(3) r1!qde

(4) rlipe

A. 1

B. 2

C. 3

D. 4

4. Choose the alternative which is closely resembles the water-image of the given combination *

1 point

A1M3b

(1) V1M3P

(2) V1M3P

(3) V1M3P

(4) V1M3P

A. 1

B. 2

C. 3

D. 4

5. Choose the alternative which is closely resembles the water-image of the given combination. *

1 point

E8t4e9C

(1) Ǝ8†4e9C

(2) E8†4e9C

(3) Ǝ8†4e9C

(4) E8†4e9C

A. 1

B. 2

C. 3

D. 4

6. Choose the alternative which is closely resembles the water-image of the given combination *

1 point

ab45CD67

(1) aƆ45CD67

(2) aƆ45CD67

(3) aƆ45CD67

(4) aƆ45CD67

A. 1

B. 2

C. 3

D. 4

7. Choose the alternative which is closely resembles the water-image of the given combination. *

1 point

ACOUSTIC

(1) ACOUSTIC

(2) ACOUSTIC

(3) ACOUSTIC

(4) ACOUSTIC

 A. 1

 B. 2

 C. 3

 D. 4

8. Choose the alternative which is closely resembles the water-image of the given combination *

1 point

monday

(1) yadnom

(2) yadnom

(3) yadnom

(4) yadnom

 A. 1

 B. 2

 C. 3

 D. 4

9. Choose the alternative which is closely resembles the water-image of the given combination *

1 point

RECRUIT

(1) RECRUIT

(2) RECRUIT

(3) RECRUIT

(4) RECRUIT

A. 1

B. 2

C. 3

D. 4

10. Choose the alternative which is closely resembles the water-image of the given combination *

1 point

QUARREL

(1) QUARREL

(2) QUARREL

(3) QUARREL

(4) QUARREL

A. 1

B. 2

C. 3

D. 4

11. Which is the correct image from the given four images? *

1 point

U4P15B7

(1) U4P15B7

(2) U4P15B7

(3) U4P15B7

(4) U4P15B7

(A) 1

(B) 2

(C) 3

(D) 4

12. Which is the correct image from the given four images. *

1 point

NhRqSy

(1) NhRqSy

(2) NhRqSy

(3) NhRqSy

(4) NhRqSy

(A) 1

(B) 2

(C) 3

(D) 4

13. Which is the correct image from the given four images. *

1 point



(x)



1



2



3

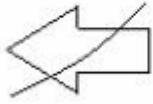
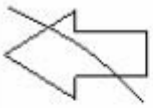


4

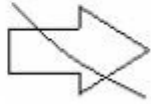
- (A) 1
- (B) 2
- (C) 3
- (D) 4

14. Which is the correct image from the given four images.

1 point



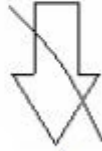
1



2



3



4

- (A) 1
- (B) 2
- (C) 3
- (D) 4

15. Which is the correct image from the given four images. *

1 point

rise

(1) L!ze

(2) esir


(3) 1ize

(4) ezi1

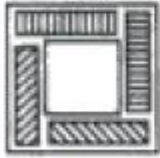
- (A) 1
- (B) 2
- (C) 3
- (D) 4

16. Which is the correct image from the given four images. *


1 point



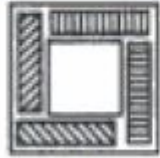
(x)



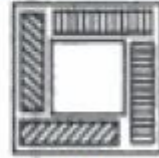
1



2



3



4

(A) 1

(B) 2

(C) 3

(D) 4

17. Which is the correct image from the given four images. *

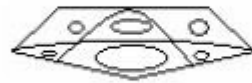
1 point



1



2



3



4

(A) 1

(B) 2

(C) 3

(D) 4

18. Which is the correct image from the given four images. *

1 point

96FSH52

(1) 00E2H25

(2) 69E2H95

(3) 00E2H25

(4) 69E2H52

(A) 1

(B) 2

(C) 3

(D) 4

19. Which is the correct image from the given four images. *

1 point

BK50RP62

(1) BK20P625

(2) BK20P625

(3) BK20P625

(4) BK50P625

(A) 1

(B) 2

(C) 3

(D) 4

20. Which is the correct image from the given four images? *

1 point



(x)



1



2



3



4

- (A) 1
- (B) 2
- (C) 3
- (D) 4

21. Which is the correct image from the given four images. *

1 point



1



2



3



4

- (A) 1
- (B) 2
- (C) 3
- (D) 4

22. Which is the correct image from the given four images. *

1 point

FAMILY

(1)

(2)

(3)

(4)

(A) 1

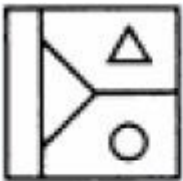
(B) 2

(C) 3

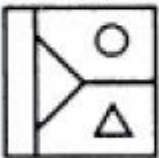
(D) 4

23. Which is the correct image from the given four images. *

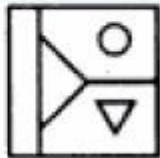
1 point



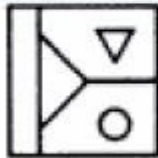
(x)



1



2



3



4

(A) 1

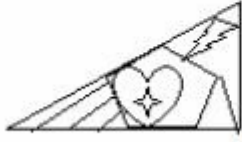
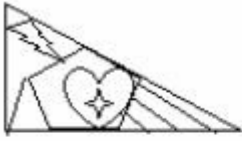
(B) 2

(C) 3

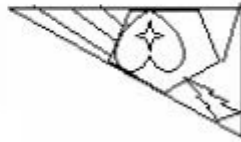
(D) 4

24. Which is the correct image from the given four images. *

1 point




1



2



3



4

- (A) 1
- (B) 2
- (C) 3
- (D) 4

25. Which is the correct image from the given four images. *

1 point



(x)



1



2



3



4

- (A) 1
- (B) 2
- (C) 3
- (D) 4

Thankyou!!!

This content is neither created nor endorsed by Google.

Google Forms